



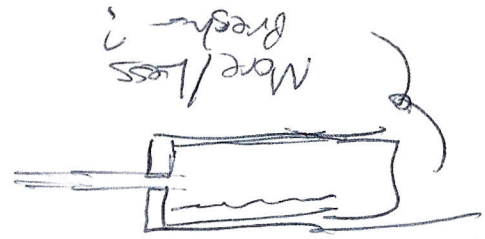
Intro to ~~Voltage~~ Ohm's law



- Review: Current Worksheet
- Voltage Worksheet
- Resistance Worksheet



+ Resistance with the same amount of current



What the relation ship Between

$$I \uparrow \quad R \downarrow \quad V \uparrow$$

$$I \downarrow \quad R \uparrow \quad V \downarrow$$

$$I \cdot R = V$$

How do I solve for I, R

